

QB365 - Question Bank Software

12th Standard


Physics(theory)

SQP Marking Scheme 2020-21

s.no.	Value Points	marks
1.	<p>According to Gauss's law, $\phi = \oint_S \vec{E} \cdot d\vec{S} = \frac{q_1}{\epsilon_0}$</p> <p>...where q_1 is the total charge enclosed by the surface S</p> <p>$\phi = \frac{2q - q}{\epsilon_0} = \frac{q}{\epsilon_0} \therefore$ Electric flux, $\phi = \frac{q}{\epsilon_0}$</p>	1
2.	<ul style="list-style-type: none">Physical quantity whose S.I. unit is JC^{-1} is Electric potential.It is a Scalar quantity.	1/2
3.	Oersted	1/2
4.	Zero degree	1
5.	Conservation of energy	1
6.	Gamma rays	1

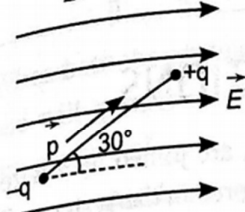
7	Total internal reflection	1
8	Frequency	1
9.	<p>Max. K.E =charge x stopping potential</p> <p style="padding-left: 40px;">=1.5 x1.6x10⁻¹⁹ J</p> <p style="padding-left: 40px;">=2.4 x 10⁻¹⁹ J or 1.5 eV</p>	1
10.	<p>The angular momentum of an electron should be an integral multiple of h/2π</p> <p>$L = mvr = nh/2\pi$</p>	1
11.	C	1
12.	B	1
13.	D	1
14.	A	1
15.	<p>(i) $\vec{\tau} = \vec{p} \times \vec{E}$</p> <p>or $\tau = p E \sin \theta$</p> <p>here $p = 2aq$</p> <p>(If point charges are q and $-q$ separated by a distance $2a$.) OR</p> <p>Torque is perpendicular to dipole moment and electric field. $\vec{\tau} \perp \vec{p}$ and $\vec{\tau} \perp \vec{E}$</p>	1

(ii) (a) Maximum Torque $\tau = pE$ when $\theta = 90^\circ$

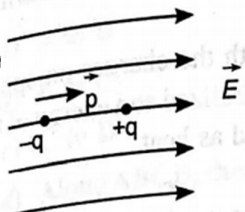


'OR'

$\tau = \frac{pE}{2}$ when, $\sin \theta = \frac{1}{2}$ i.e., $\theta = 30^\circ$ or 150°



(b)




$\therefore \theta = 0^\circ$ or 180°
 $\therefore \tau = pE \sin 0^\circ = 0$
 $\therefore \tau = \text{minimum}$

1

1

1



16.	<p>(i) Real, magnified and inverted image. (1)</p> <p>(ii) The image produced by the objective lens should either be formed at focus of eyepiece or between focus and eyepiece. (1)</p> <p>(iii) If image formed by the object is placed between focus of eyepiece and an eyepiece; then magnifying power is $m_1 = \frac{v_0}{-u_0} \cdot \left(1 + \frac{D}{f_e}\right)$ which the case of first microscope. (2)</p> <p>But in case of second microscope, if image formed by objective is formed at the focus of eyepiece, then final image is seen at infinity and angular magnification produced will be $m_2 = \frac{v_0}{-u_0} \cdot \frac{D}{f_e}$; $[\because m_2 < m_1]$</p>	
-----	--	--

17. (a) $C = 2+3+4 = 9\text{pF} = 9 \times 10^{-12} \text{ F}$ (1/2)

(b) $Q_1 = C_1 V = 2 \times 10^{-12} \times 100 = 2 \times 10^{-10} \text{ C}$ (1/2)

Similarly $Q_2 = 3 \times 10^{-10} \text{ C}$, (1/2)

$Q_3 = 4 \times 10^{-10} \text{ C}$ (1/2)

18. Resistance of shunt $r_s = \frac{I_g R_G}{I - I_g} = \frac{1.0 \times 0.80}{5.0 - 1.0} = 0.20 \Omega$ (1)

Net resistance of ammeter and shunt

$R = \frac{R_G \times r_s}{R_G + r_s} = 0.16 \Omega$ (1)

OR

$$BLI = mg = \lambda Lg$$

$$B = \lambda g / I \quad \left(\frac{1}{2} \right)$$

From Fleming left hand rule, magnetic field must act horizontally in a direction perpendicular to the wire carrying current. $\left(\frac{1}{2} \right)$

19. Magnetic declination (1)

Correct figure for horizontal component $(1/2)$

Correct relation $B_H = B_E \cos \delta \quad (1/2)$

OR

$$B_H = \frac{1}{\sqrt{3}} B_V \quad \text{or} \quad \frac{B_V}{B_H} = \sqrt{3}$$

$$\text{Also} \quad \frac{B_V}{B_H} = \tan \delta$$

$$\therefore \tan \delta = \sqrt{3}$$

$$\text{or} \quad \delta = 60^\circ \quad (1)$$

$$(b) \quad B_H = B_E \cos \delta = B_E \cos 60^\circ = \frac{B_E}{2}$$

$$\therefore \frac{B_H}{B_E} = \frac{1}{2} \quad (1)$$

$$20. (a) \quad M = \frac{\Phi_2}{I_1} = \frac{0.5 \times 10^{-3} \text{ Wb}}{0.5 \text{ A}} = 10^{-3} \text{ H} = 1 \text{ mH}$$

(1)

QB365 - Question Bank Software

- (a) An instantaneous emf is produced in the larger coil on account of mutual inductance. (1)

21. $\lambda = 589 \text{ nm} = 589 \times 10^{-9} \text{ m}$

$c = 3 \times 10^8 \text{ m/s}$

(a) Frequency of light $\nu = \frac{c}{\lambda} = \frac{3 \times 10^8}{589 \times 10^{-9}}$
 $= 5.09 \times 10^{14} \text{ Hz}$

(i) Frequency of refracted light $\nu' = \nu$
 $= 5.09 \times 10^{14} \text{ Hz} \text{ (1)}$

(b) Wavelength of refracted light $\lambda' = \frac{\lambda}{n}$
 $= \frac{589}{1.33}$
 $= 442.8 \text{ nm}$
(1)

22. Correct understanding of Wavefront (1)

Correct depiction diagrammatically (1)

23. Since $\beta = \frac{\lambda D}{d}$; we can write $\frac{\beta'}{\beta} = \frac{\lambda'}{\lambda}$

Here $\beta = 8.1 \text{ mm}$; $\beta = 7.2 \text{ mm}$, $\lambda = 630 \text{ nm}$

$$\therefore \lambda' = 560 \text{ nm} \quad (2)$$

24. Correct biasing (1)

Two advantages (1)

Or

Circuit diagram (1)

Characteristic curve (1)

25. Correct labelled diagram (1)

Correct input Output waveforms (1)

Section C

26. Derivation of resistivity $\rho = \frac{m}{ne^2\tau}$ (3)

27. Labelled diagram (1)

Principle (1/2)

Working (1)

Sinusoidal nature (1/2)

Or

Mutual inductance definition (1)

Derivation of $M_{21} = M_{12} = M = \frac{\mu_0 N_1 N_2 A r_i^2}{l}$ (2)

28. (a) Momentum of electron = Momentum of Photon

$$\therefore p = \frac{h}{\lambda} = \frac{6.63 \times 10^{-34}}{1 \times 10^{-9}} = 6.63 \times 10^{-25} \text{ Kg m s}^{-1} \quad (1)$$

(b) Energy of Photon = $\frac{hc}{\lambda} = \frac{6.63 \times 10^{-25} \times 3 \times 10^8}{1} = 1.99 \times 10^{-16} \text{ J}$

(c) K.E of electron $K = \frac{p^2}{2m} = \frac{(6.63 \times 10^{-25})^2}{2 \times 9.11 \times 10^{-31}} = 2.41 \times 10^{-19} \text{ J}$

OR

Here $\nu_0 = 3.3 \times 10^{14} \text{ Hz}$ and $\nu = 8.2 \times 10^{14} \text{ Hz}$

$\therefore h(\nu - \nu_0) = eV_0$

\therefore Cut off voltage $V_0 = \frac{h}{e}(\nu - \nu_0)$

$\therefore V_0 = \frac{6.63 \times 10^{-34} \times (8.2 \times 10^{14} - 3.3 \times 10^{14})}{1.6 \times 10^{-19}} = 2.0 \text{ V} \quad (3)$

29. According to de-Broglie's hypothesis

Total path length of orbit = $n\lambda$

or $2\pi r_n = n\lambda \quad \text{--- (1)}$

also $\lambda = \frac{h}{p} = \frac{h}{m v_n}$

\therefore eqⁿ (1) $2\pi r_n = n \cdot \frac{h}{m v_n}$

or $m v_n r_n = \frac{n h}{2\pi}$

which is Bohr's quantum condition. (1)

$$(b) E_C - E_B = \frac{hc}{\lambda_1} \quad \text{--- (i)}$$

$$E_B - E_A = \frac{hc}{\lambda_2} \quad \text{--- (ii)}$$

$$\neq E_C - E_A = \frac{hc}{\lambda_3} \quad \text{--- (iii)}$$

On adding eqns (i) + (ii)

$$E_C - E_A = \frac{hc}{\lambda_1} + \frac{hc}{\lambda_2}$$

$$\text{or } \frac{hc}{\lambda_3} = \frac{hc}{\lambda_1} + \frac{hc}{\lambda_2} \quad \text{From eqn (iii)}$$

$$\text{or } \frac{1}{\lambda_3} = \frac{1}{\lambda_1} + \frac{1}{\lambda_2} \quad (2)$$

$$30. (a) \frac{R_1}{R_2} = \frac{R_0 A_1^{1/3}}{R_0 A_2^{1/3}} = \left(\frac{A_1}{A_2}\right)^{1/3} = \left(\frac{1}{8}\right)^{1/3} \quad (1 \frac{1}{2})$$

$$(b) \frac{S_1}{S_2} = \frac{4\pi R_1^2}{4\pi R_2^2} = \frac{(R_0 A_1^{1/3})^2}{(R_0 A_2^{1/3})^2} = \left(\frac{A_1}{A_2}\right)^{2/3} \quad (1 \frac{1}{2})$$

$$31. (a) \text{ Proof of } \vec{E} = \frac{2\vec{p}}{4\pi\epsilon_0 r^3} \quad (3)$$

$$(b) \text{ As } \vec{E} = 2x\hat{i}$$

Electric flux is finite only for surfaces 1 and 2 shown in fig. and for all remaining surfaces flux is zero.

Area of each surface is a^2 ; For face (1) $x=0 \therefore E_1=0 \therefore \phi_1=0$

$$\therefore \phi_2 = \vec{E} \cdot \vec{S} = (2a\hat{i}) \cdot (a^2\hat{i}) = 2a^3$$

Charge enclosed $q = \rho \cdot 2a^3 = 2\epsilon_0 a^3$
 (1+1)

OR

(a) Statement Gauss's law (1)

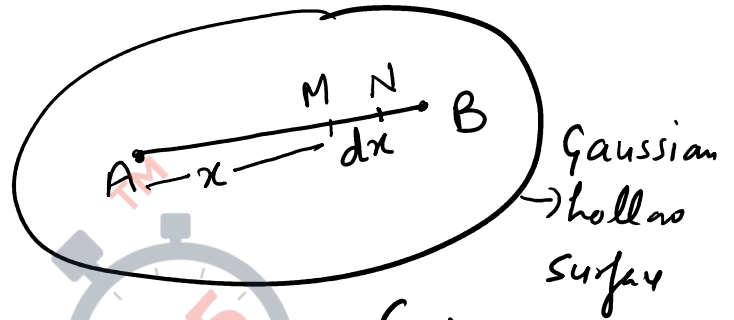
Derivation of electric field due to long straight conductor (2)

(b)

Charge on element MN

$$dq = \lambda dx$$

$$= kx dx$$



Total Charge on wire AB = $q = \int dq$

$$= \int_0^L kx dx$$

$$= \frac{1}{2} kL^2$$

∴ Total electric flux through enclosed

Gaussian hollow surface $\phi_E = \frac{q}{\epsilon_0} = \frac{kL^2}{2\epsilon_0}$ (2)

32. (a) Labelled diagram of Transformer (1)

(b) Principle (1)

(c) $V_p = -N_p \frac{d\phi_B}{dt}$ and $V_s = -N_s \frac{d\phi_B}{dt}$

∴ $\frac{V_s}{V_p} = \frac{N_s}{N_p}$ — (1) | Also $P_{in} = P_{out}$

∴ $V_p I_p = V_s I_s$

∴ $\frac{V_s}{V_p} = \frac{I_p}{I_s}$ — (2)

From equation (1) **QB365 - Question Bank Software**

$$\frac{V_s}{V_p} = \frac{I_p}{I_s} = \frac{N_s}{N_p} = k \quad (1)$$

(b) Here $V_p = 220 \text{ V}$; $V_s = 110 \text{ V}$ and $P_{\text{out}} = 550 \text{ W}$

\therefore Input Power = Output Power

$$\therefore P_{\text{in}} = P_{\text{out}} = P(\text{say}) = V_p I_p = 550 \text{ W}$$

$$\therefore \text{Current drawn } I_p = \frac{P}{V_p} = \frac{550}{220}$$
$$= 2.5 \text{ A}$$

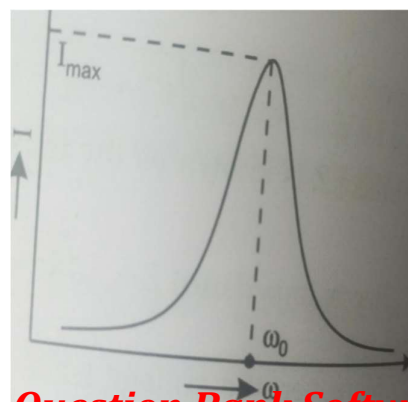
(2)

OR

Correct derivation of impedance $Z = \sqrt{R^2 + (X_L - X_C)^2}$

(3)

Correct graph



(1)

Correct explanation : We vary the capacitance of a capacitor in the tuning circuit so that the resonant frequency of the circuit becomes almost equal to the frequency of radio signal of a particular station. (1)

33. (a) The observed phenomenon is diffraction of light. (1)

(b) There is significant fall in intensity of the secondary maxima in compared to central maxima because in central maxima only constructive interference is taking place while in secondary maxima constructive as well as destructive interferences are taking place. (2)

(c) When width of the slit 'a' (say) is doubled angular width θ (consequently linear width too) of central maxima given by $\theta = \pm \frac{\lambda}{a}$ is reduced to one half of its previous value means size of central maxima will be reduced to half of its previous value. (2)

OR

(a) Brief description of diffraction at a single slit , clear figure with condition for the angular width of secondary maxima and secondary minima. (3)

(b) Given $\lambda_1 = 590 \text{ nm} = 590 \times 10^{-9} \text{ m}$
 $\lambda_2 = 596 \text{ nm} = 596 \times 10^{-9} \text{ m}$
slit width $a = 2 \times 10^{-6} \text{ m}$ and

Let first QB365 - Question Bank Software at distance x

such that
$$a \sin \theta = \frac{ax}{D} = \frac{3\lambda}{2}$$

$$\Rightarrow x = \frac{3\lambda D}{2a}$$

∴ Separation between the positions of first maxima

$$\begin{aligned} \Delta x &= x_2 - x_1 \\ &= \frac{3\lambda}{2a} (\lambda_2 - \lambda_1) \\ &= \frac{3 \times 1.5}{2 \times 2 \times 10^{-6}} (596 \times 10^{-9} - 590 \times 10^{-9}) \\ &= 6.75 \times 10^{-3} \text{ m or } 6.75 \text{ mm} \end{aligned}$$

(2)